








What is Less? 1-10 Worksheet 1

Name: _____

Count each group and cross out to make less.

(Work towards counting backwards as a strategy for mentally computing "less". Eg. What is 2 less than 5? 4,3. What is 4 less than 10? 9,8,7,6.)

 What is 2 less?	$5 - 2 =$
 What is 3 less?	$3 - 3 =$
 What is 1 less?	$6 - 1 =$
 What is 2 less?	$4 - 2 =$
 What is 1 less?	$5 - 1 =$
 What is 1 less?	$3 - 1 =$
 What is 2 less?	$7 - 2 =$

1	2	3	4	5	6	7	8	9	10
---	---	---	---	---	---	---	---	---	----